

डी. बी. एन. विद्या मन्दिर मुबारक मण्डी, जम्मू
कक्षा - तीसरी

व्रीष्मकालीन कार्य परियोजना (सत्र 2021-2022)
विषय - हिन्दी

प्र०1:- 'काशा! अगर मैं चिड़िया होती' कविता याद करे।

प्र०2:- पाठ 4-'काशा! अगर मैं चिड़िया होती' एवं पाठ 5-'चाय की कहानी' याद करके लिखें।

प्र०3:- प्रत्येक मात्रा के पाँच-पाँच शब्द बनाए।

प्र०4:- कौरुना संक्रमण से बचने हेतु सावधानियों के संदर्भ में चार्ट या मॉडल बनाए।

प्र०5:- घर में उपलब्ध समाचार पत्रों को रोज पढ़ें।

HOLIDAYS HOMEWORK FOR CLASS 3RD

Sub- E.vs

1. Revise ch-4(Plants) and ch-5(Leaves) and read ch-6(Animals).
- 2.Paste the different types of leaves of different plants in your E.vs notebook also write the names of the plants.
- 3.On a coloured sheet/ chart prepare a slogan for COVID-19 and write 10 lines of your experience about quarantine on a sheet and attach it with the slogan

1. Match each type with its definition.

Carnivores eat that they can find. They eat animals and plants.

Decomposers eat the remains of dead or injured animals.

Omnivores get nutrients and energy from eating plants.

Scavengers are tiny animals that break down dead plants and animals.

Herbivores kill other animals and eat the meat.

2. Write the senses these animals need to find food (sight/smell/taste/touch/hearing)

- Eagle:

- Owl:

- Lion:

- Bat:

3. Match the definitions with numbers.

- Oviparous

- Viviparous

- Ovoviviparous

- The babies develop inside their mother's womb. They drink their mother's milk.

(cats/humans/horses)

- They lay eggs. The eggs hatch into new offspring. (birds/fish/reptiles)

- The eggs develop inside the mother's body and hatch inside. (some reptiles/amphibians/some sharks)

**INSTRUCTIONS FOR THE HOLIDAYS
HOMEWORK 2021-22**

- 1. The holiday work must be done in a very neat and presentable manner.*
- 2. Maintain a separate notebook for holidays homework.*
- 3. Use good quality pencil and eraser to maintain tidiness of the work.*
- 4. Parents can be the facilitators for the child at home but let the child complete all his/her work in his/her own handwriting.*
- 5. Shading should be done with pencil colours only.*

HOLIDAYS HOMEWORK

Sub:English

- I. Read a story book of your choice and then do the following exercises -**
 - a) Name of the story book.**
 - b) Draw your favourite character.**

NAME OF THE STORY: _____

1 Pick out 10 new words you have come across in your story book

S.NO.	NEW WORDS		
1			
2			
3			
4			
5			
6			
7			
8			
9			
10			

1. Arrange the above words in alphabetical order.

S.NO.	Alphabetical Order		
1			
2			
3			
4			
5			
6			
7			
8			
9			
10			

II. Let's have 'Fun with words'. Make as many 3, 4 or 5 letter words as you can from one word.

1. BUTTERFLY: _____

2. CAULIFLOWER: _____

3. SUNFLOWER: _____


4. CROCODILE: _____

3 / 7

5. SNOW WHITE: _____

1. PICTURE DESCRIPTION

Describe these pictures in 7 to 8 lines



III. Read the passages. Then answer the questions below

Name : _____ <https://whatistheurl.com>

Read and answer the questions please.

Coronavirus is a kind of common virus causing infections to humans, mammals, and birds. In humans, coronavirus can cause respiratory infections in the nose, sinuses, or throat. Most coronavirus is not dangerous while some are serious like SARS and MERS.



The coronavirus gets its name from their protein spikes similar to the solar corona. Symptoms of this coronavirus in humans include cough, fever, throat infections, and respiratory problems. Not all coronavirus are lethal but some are severe to cause death.

The current outbreak of novel coronavirus (2019-nCoV) was identified in China and has killed many people. Thousands are said to have infected across the world in Europe, Australia, and North America at the start of March 2020. Covid-19 is the name given by WHO (World Health Organization) . covid-19 stands for coronavirus disease of 2019.

1. Coronavirus infects _____, _____, and _____
2. What are the dangerous variations of Coronavirus?
3. Why this virus is named Corona?
4. What are the symptoms?
5. Who named the virus?
6. What does covid-19 stand for?

<https://whatistheurl.com>

Please visit our site for worksheets and charts <https://whatistheurl.com/>

MATHS

⇒ WRITE AND REVISE THE TABLE FROM 2 TO 12

⇒ COMPLETE THE WORKSHEET NO 1,2,3,4,5 & 6 OF MATHS



Name: _____

Finding the Place Value

Directions: Complete each equation below to make it true.

1) 5 thousands + 3 hundreds + 8 tens + 1 one = _____

2) 9 thousands + 6 hundreds + 3 tens + 3 ones = _____

3) 7 thousands + 4 hundreds + 2 tens + 2 ones = _____

4) 6 thousands + 6 hundreds + 3 tens + 8 ones = _____

5) 5 thousands + 3 hundreds + 6 tens + 5 ones = _____

6) 7 thousands + 4 tens + 5 hundreds + 1 one = _____

7) 5 ones + 4 thousands + 4 tens + 3 hundreds = _____

8) 5 tens + 6 hundreds + 2 thousands + 8 ones = _____

9) 2 thousands + 5 hundreds + 0 ones + 6 tens = _____

10) 2 hundreds + 6 ones + 3 tens + 1 thousand = _____

a. 9956 = _____ thousands + _____ hundreds + _____ tens + _____ ones

b. 3889 = _____ thousands + _____ hundreds + _____ tens + _____ ones


c. 9023 = _____ thousands + _____ hundreds + _____ tens + _____ ones

d. 1842 = _____ thousands + _____ hundreds + _____ tens + _____ ones

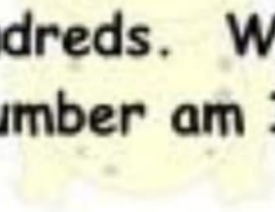


Place Value Riddles

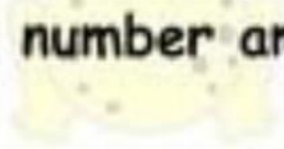
1. I have 27 ones
and 4 hundreds.
What number am I?



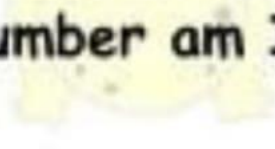
2. I have 6 ones, 7
tens, and 14
hundreds. What
number am I?



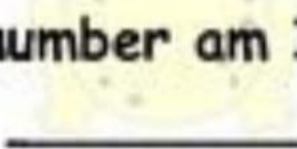
3. I have 15 ones,
8 hundreds, and 1
thousand.
What number am I?



4. I have 3 tens, 6
hundreds, and 17
thousands. What
number am I?



5. I have 5 ones, 8
tens, and 17
hundreds. What
number am I?



6. I have 4 tens
and 56 hundreds.
What number am I?



Name :

Topic : Numbers



Draw a line to match the number to the words :

4495

8 thousand 9 hundred and 3 tens 5 ones.

553

4 thousand 4 hundred and 9 tens 5 ones.

8935

5 thousand 5 hundred and 6 tens 3 ones.

7856

5 hundred and 5 tens 3 ones.

5563

5 thousand 3 hundred and 6 tens 5 ones.

786

7 thousand 8 hundred and 5 tens 6 ones.

5365

2 thousand 6 hundred and 5 tens 3 ones.

236

5 thousand 2 hundred and 8 tens 5 ones.

2653

3 hundred and 5 tens 5 ones.

5285

2 hundred and 3 tens 6 ones.

355

9 thousand 2 hundred and 5 tens 6 ones.

9256

7 hundred and 8 tens 6 ones.

Topic : Pattern

Study the pattern and fill in the missing numbers.



Comparing and Arranging Numbers

Re-write the numbers in order as indicated.

(a)

9941	6814	6368	2544	2040	8048
------	------	------	------	------	------

--	--	--	--	--	--

greatest smallest

(b)

6526	2815	5883	6358	3763	1541
------	------	------	------	------	------

--	--	--	--	--	--

smallest greatest

(c)

4161	5593	9619	4500	9312	8347
------	------	------	------	------	------

--	--	--	--	--	--

smallest greatest

(d)

6770	8917	8708	8200	4669	1476
------	------	------	------	------	------

--	--	--	--	--	--

smallest greatest

(e)

6038	3423	9759	3879	7864	4720
------	------	------	------	------	------

--	--	--	--	--	--

greatest smallest

(f)

7197	4518	4994	8898	7505	7494
------	------	------	------	------	------

--	--	--	--	--	--

greatest smallest

1. Read the number. What is the place value of the underlined digit?

a 4821 b 3261 c 3827

d 5637 e 8409 f 2064

g 3956 h 3749 i 2690

2. Write in expanded form.

a 7824 = _____

b 3549 = _____

c 6042 = _____

d 8050 = _____

e 5097 = _____

f 4230 = _____

g 9371 = _____